

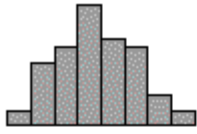
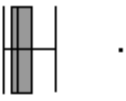
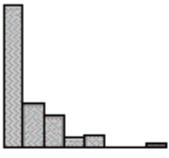
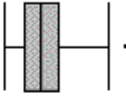
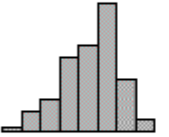

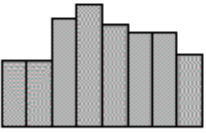
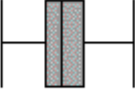
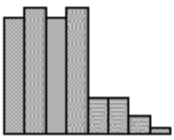
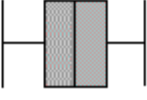
Table Number: \_\_\_\_\_

Group Name: \_\_\_\_\_

Group Members: \_\_\_\_\_

## Matching Histograms to Boxplots

Consider all of the graphs below, the histograms and the boxplots, to be on the same scale. Match each histogram with its corresponding boxplot, by writing the letter of the box plot in the space provided.

 <p>1. _____</p>	 <p>A.</p>
 <p>2. _____</p>	 <p>B.</p>
 <p>3. _____</p>	 <p>C.</p>
 <p>4. _____</p>	 <p>D.</p>
 <p>5. _____</p>	 <p>E.</p>

### Reference

Scheaffer, R.L., Watkins, A., Witmer, J., & Gnanadesikan, M. (2004a). *Activity-based statistics: Instructor resources* (2<sup>nd</sup> edition, Revised by Tim Erickson). Key College Publishing.